

# Year 2 Maths Activity Mat

6

## Section 1

There are 4 bridesmaids at a wedding. Each bridesmaid needs 5 roses in their bouquet. How many roses will there be altogether?

## Section 2

If **A** equals 10, what is **B**?

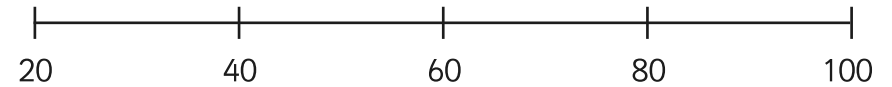
$$5 + A = B$$

$$B = \text{[ ]}$$

## Section 3

Put these numbers on the number line:

35    50    75    90



## Section 4


There are 16 cups on a shelf. Half of them are pink. How many of them are not pink?

## Section 6

Jane has 20 beads. She gives half of them to Naz. Then she gives 8 to Meg. How many beads does she have left?

## Section 7

Dan will go to bed at 9.30. How long is it until his bedtime?



## Section 8

Put the correct sign in: **x** **+** **÷**

$$9 \text{ [ ] } 4 = 13$$

$$3 \text{ [ ] } 5 = 15$$

$$1 \text{ [ ] } 9 = 10$$

$$10 \text{ [ ] } 5 = 2$$

## Section 5

Can you show 2 different ways to make 28p?

## Year 2 Maths Activity Mat: 6

### Answers

#### Section 1

There are 4 bridesmaids at a wedding. Each bridesmaid needs 5 roses in their bouquet. How many roses will there be altogether?

20

#### Section 2

If **A** equals 10, what is **B**?

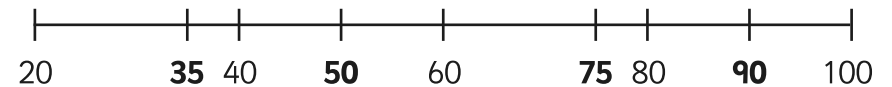
$$5 + A = B$$

B = 15

#### Section 3

Put these numbers on the number line:

35 50 75 90



#### Section 4

There are 16 cups on a shelf. Half of them are pink. How many of them are not pink?

8


#### Section 6

Jane has 20 beads. She gives half of them to Naz. Then she gives 8 to Meg. How many beads does she have left?

2

#### Section 7

Dan will go to bed at 9.30. How long is it until his bedtime?



2 hours

#### Section 8

Put the correct sign in: **x** + **÷**

$$9 \boxed{+} 4 = 13$$

$$3 \boxed{\times} 5 = 15$$

$$1 \boxed{+} 9 = 10$$

$$10 \boxed{\div} 5 = 2$$

#### Section 5

Can you show 2 different ways to make 28p?

2 correct ways to make 28p.

Eg. 20p + 5p + 2p + 1p

10p + 10p + 2p + 2p + 2p + 2p