



I How many muffins are there altogether?





There are muffins on each tray.

There are trays.

There are muffins altogether.



2 How many apples are there altogether?

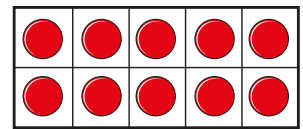
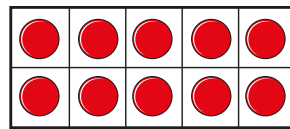
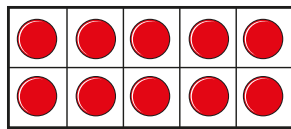
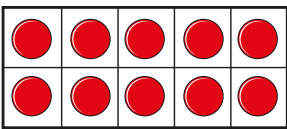


There are apples on each ten frame.

There are ten frames.

There are apples altogether.

3 How many counters are there altogether?




There are counters altogether.

4 Complete the number tracks.



5 Tom has these balloons.



He needs 60 balloons for a party.

Does Tom have enough balloons? _____

How do you know?

