



e) 3×240



f) 7×131



- 5 A lorry driver travels 156 km per day.
How many kilometres will the lorry driver have travelled after 3 days?

- 6 Ron and Teddy are working out 5×245



Ron

I know the answer will be greater than 1,000 because I know 5×200 is 1,000

I know the answer should end in 5 because I know 5×5 is 25



Teddy

- a) Who is correct? Circle your answer.

Ron

Teddy


both

neither

- b) Use a written method to work out 5×245

- 7 There are 7 year groups in a school.
There are 112 children in each year group.
How many children are there in the whole school?

- 8 A banana weighs 140 g
A pineapple weighs 345 g



- Bag A contains 8 bananas and bag B contains 3 pineapples.
Which bag weighs more and by how much?
Show your working.

Bag _____ weighs g more than bag _____.